

Time: 10 Minutes

Paper Math 2

Total Marks: 10

3rd Month, 3rd Week, 1st Day

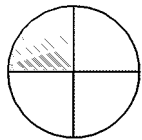
Syllabus: Ex # 1. Q # 1

Q.1. Match the shape with the given fraction.

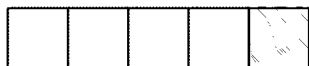
(10)

درج ذیل اشکال کو دی گئی فرکشن کے ساتھ ملائیں۔

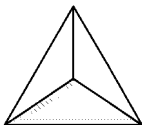
$\frac{1}{3}$



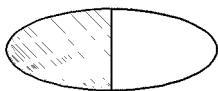
$\frac{1}{4}$



$\frac{1}{2}$



$\frac{1}{5}$




---



---



---



---



---



---



---



---

Time: 10 Minutes

Paper Math 2

Total Marks: 10

3rd Month, 3rd Week, 1st Day

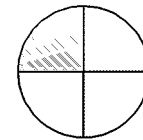
Syllabus: Ex # 1. Q # 1

Q.1. Match the shape with the given fraction.

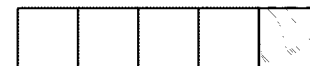
(10)

درج ذیل اشکال کو دی گئی فرکشن کے ساتھ ملائیں۔

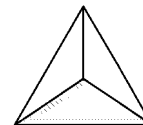
$\frac{1}{3}$



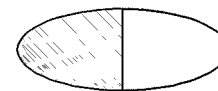
$\frac{1}{4}$



$\frac{1}{2}$



$\frac{1}{5}$




---



---



---



---



---



---



---



---